

Blouberg Ridge Primary School


Social Sciences: History

Name:

Date: 28 June 2021

Examiner: L. Arbuckle

Task 3: Controlled Test



Marker and Date:

Grade: 4A / D / K / PR / W

Time: 1 hour

Moderator:

Total: /35

Section A: (16)

Question 1: Match Column A with Column B by filling in the correct letter in Column C.

Column A	Column B	Column C
1.1 Evidence	a. A statue or structure that has been established to remind people of a person or event.	1.1 _____
1.2 Memorial	b. An object made by a human being, usually of historical interest.	1.2 _____
1.3 Artifacts	c. Something that provides you with proof.	1.3 _____

(3)

Question 2: Look at the pictures below and answer the questions that follow.

Picture A.



<https://www.history.com/>

Picture B.



<https://www.brandsouthafrica.com/>

2.1 Picture A is an example of a _____ source. (1)

2.2 What is an advantage of using using such a source? _____

2.3 Identify the source of information in picture B. _____ (1)

2.4 Explain why you think the event in picture A was written down. _____ (1)

2.5 In your opinion, why do you think it is important to have different types of sources of information about the same event? _____ (1)

2.6 Complete the table below by filling in the missing information.

Sources	Examples
Oral source	a. _____
b. _____	Objects

(2)


Question 3: Read the diary entry below and answer the questions that follow:

My Week
June 2018
Maria Plaatjies




Monday

I caught the early bus to school because I had tennis practice. A traffic jam made me late.



Tuesday

I did my homework and studied hard for my test.



Wednesday

I played with my brother. We rode our bikes.



Thursday

It was Mom's birthday today. Granny made a yummy cake!



Friday

I wrote my spelling test today. I got full marks!



3.1

Using the information above, how do we know that Maria takes her studies seriously?

_____ (2)

3.2 Is Maria a sporty person? Explain your answer. _____ (2)

_____ (2)

3.3 What other source of information could we use to find out about her day? _____ (1)

_____ (1)

3.4 Give one disadvantage of the source mentioned in question 3.3. _____ (1)

_____ (1)

Section B: (19)

Question 4: Complete the mind map below by filling in the missing information.

Qualities of a democratic leader are ...

a. _____



b. _____

c. _____

<https://www.kindpng.com/>

Question 5: Answer the questions below.

5.1 Explain why Nelson Mandela was arrested and sent to prison. _____

(1)

5.2 Nelson Mandela believed in a (democratic / autocratic) society. (1)

5.3 Look at the pictures below and complete the timeline.



Nelson Mandela was born on 18 July 1918.



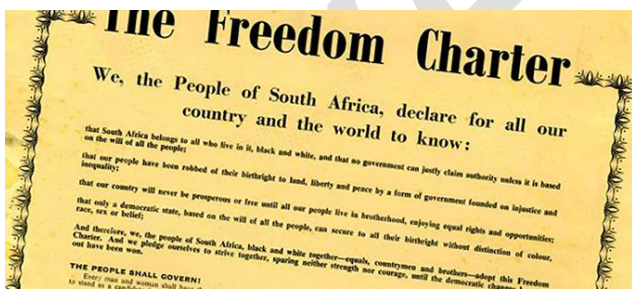
<https://www.theguardian.com/>

Nelson Mandela was elected as South Africa's first democratic president in 1994.

<http://attfigs.blogspot.com>



<https://www.independent.co.uk/>



<https://www.brandsouthafrica.com/>

Nelson Mandela and his friends wrote the Freedom Charter in 1955.

Nelson Mandela was convicted and sent to prison in 1964.

Year	Information
a.	Nelson Mandela was born.
1955	b.

1964	Nelson Mandela was arrested and sent to jail.
c.	d.

(4)

Question 6: Rewrite the following sentences so that they are true.

6.1 A protest is an action that shows happiness about something.


(1)

6.2 A form of government where all people of the legal age choose their leader by voting is called an autocracy.

(1)

Question 7: Write a paragraph about the person shown below in the picture. Use the writing frame to help you write your paragraph. Remember, this is NOT for marks.

In a gentle way, you can change the world.



Anger is the enemy of non-violence.

You must be the change you want to see in the world.

8.2 Discuss why a statue was erected of him in Pietermaritzburg. _____

_____ (2)

8.3 What was "The Great March"? _____

_____ (1)

Exemplar