



education

Department:
Education
PROVINCE OF KWAZULU-NATAL

**NATIONAL
SENIOR CERTIFICATE**

GRADE 10

MATHEMATICS

COMMON TEST

MARCH 2019

MARKS: 75

TIME: 1½ hours

This question paper consists of 6 pages.

INSTRUCTIONS AND INFORMATION

Read the following instructions carefully before answering the questions.

1. This question paper consists of 8 questions.
2. Answer ALL the questions.
3. Clearly show ALL calculations, diagrams, graphs, etc. which you have used in determining your answers.
4. Answers only will NOT necessarily be awarded full marks.
5. You may use an approved scientific calculator (non-programmable and non-graphical), unless stated otherwise.
6. If necessary, round off answers correct to TWO decimal places, unless stated otherwise.
7. Diagrams are NOT necessarily drawn to scale.
8. Write neatly and legibly.



Department:
Education
PROVINCE OF KWAZULU-NATAL

NATIONAL SENIOR CERTIFICATE:
COMMON TEST: MARCH 2019

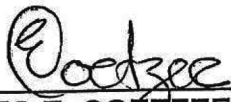
TO: THE CHIEF INVIGILATOR OF ALL SCHOOLS OFFERING
MATHEMATICS: GRADE 10

ERRATA

Please take note of the following change:

Page	ERROR	CORRECTION
Page 6 (Q 8.2)	In the diagram below $PQ = Q = MN$, $QM \parallel PN$ and ...	In the diagram below $PQ = QM = MN$, $QM \parallel PN$ and ...

Kindly ensure that candidates are informed of the Errata.



MS E. COETZEE
ASSISTANT DIRECTOR
PROVINCIAL EXAMINATION

4/3/2019

DATE

...Championing Quality Education-Creating and Securing a Brighter Future

QUESTION 1

1.1 Factorise the following expressions fully:

1.1.1 $6x^2 + 7x - 20$ (2)

1.1.2 $x^3 + x^2 - x - 1$ (3)

1.2 Simplify the following expressions fully:

1.2.1 $(2x + 3)(5 - x)$ (3)

1.2.2 $(xy^3 - 3)(x^2y^6 + 3xy^3 + 9)$ (2)

1.2.3 $\frac{3^{2x-1} \cdot 5^{x-3}}{45^{x-2}}$ (4)

[14]

QUESTION 2

Determine, without the use of a calculator, the value of x in each of the following:

2.1 $(x - 3)(x + 2) = 0$ (2)

2.2 $11 \times 3^{2x+1} = 297$ (3)

2.3 $\frac{4x^2 - 3x - 1}{4x + 1} + \frac{x^3 + 1}{x^2 - x + 1} = 2$ (5)

2.4 $\pi x^2 h = V$ (2)

[12]

QUESTION 3

3.1 Rewrite 0,45 as a common fraction, in simplest form. (1)

3.2 Given: $P = \sqrt{\frac{-20x}{1-3x}}$; where $x \in R$

3.2.1 For which value(s) of x is P undefined? (2)

3.2.2 If $x = 7$, determine between which two integers P lies. (2)

3.3 The larger of two consecutive integers is represented by $x + 3$. Determine an expression which represents the smaller integer. (1)

[6]

QUESTION 4

4.1 Solve for x and y simultaneously:

$$4x = 10 - 3y \quad (5)$$

$$y + 2x = 6$$

4.2 The following inequality is given: $-9 \leq 2x + 3 < 5$; where $x \in R$

4.2.1 Solve for x in the inequality. (3)

4.2.2 Represent your answer to QUESTION 4.2.1 on a number line. (1)

4.2.3 Write your answer to QUESTION 4.2.1 in interval notation. (1)

4.3 The mean of three numbers is 25. The second number is four less than twice the first. The third number is two more than four times the first.

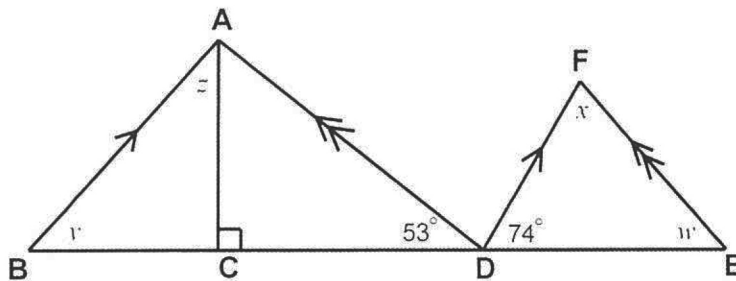
(Hint: Let the smallest number be x)

Calculate the numerical value of the smallest number. (4)
[14]

QUESTION 5

Study the diagram below and calculate the unknown angles w , x , y and z .

Give reasons for your statements.



[4]

QUESTION 6

6.1 Complete the following statements:

6.1.1 A quadrilateral with two pairs of adjacent sides equal is a (1)

6.1.2 A quadrilateral with both pairs of opposite sides parallel is a (1)

6.2 Which quadrilateral has diagonals that always bisect its angles and also bisect each other? (1)

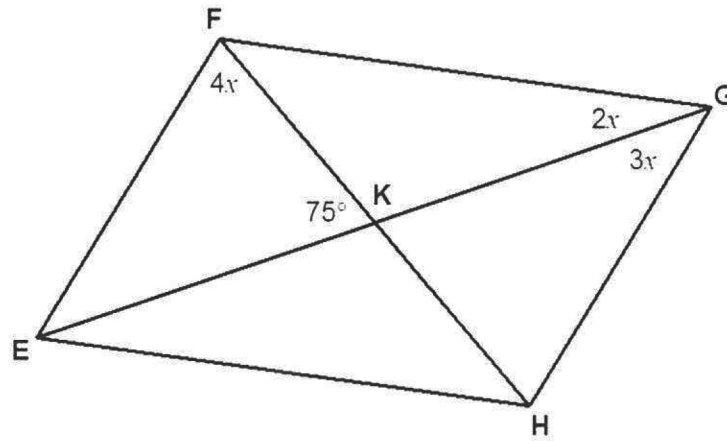
6.3 Given the following three quadrilaterals: a rectangle, a rhombus and a kite.

Which of these quadrilaterals do not have perpendicular diagonals? (1)
[4]

Give reasons for your statements in QUESTIONS 7 and 8.

QUESTION 7

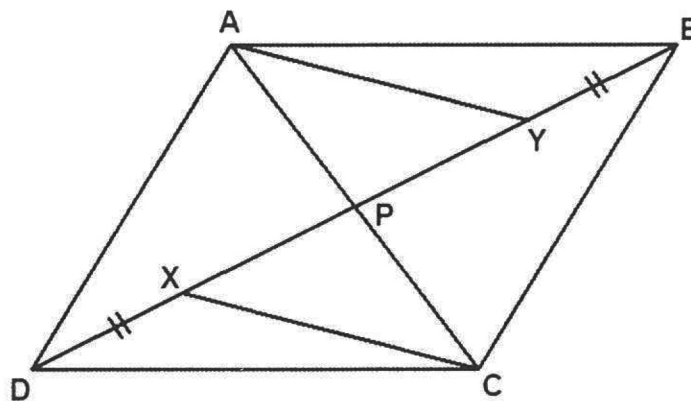
7.1 In the sketch below, EFGH is a parallelogram.
 $\hat{FKE} = 75^\circ$; $\hat{EFK} = 4x$; $\hat{FGK} = 2x$ and $\hat{KGH} = 3x$.



7.1.1 Calculate the value of x . (3)

7.1.2 Calculate the size of \hat{GHE} . (2)

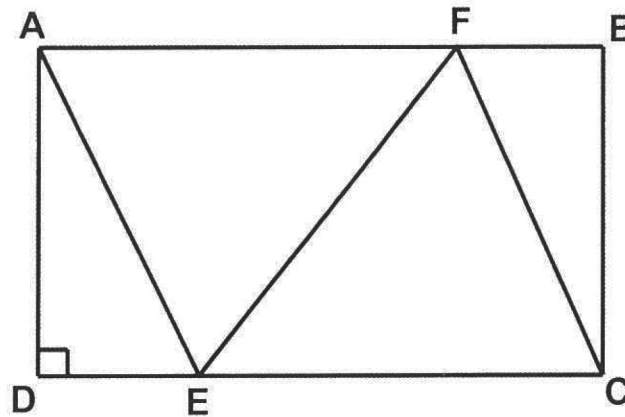
7.2 In the diagram ABCD is a parallelogram with diagonals intersecting at P.
 AY and CX are drawn such that $BY = DX$.



Prove that AYCX is a parallelogram. (3)
 [8]

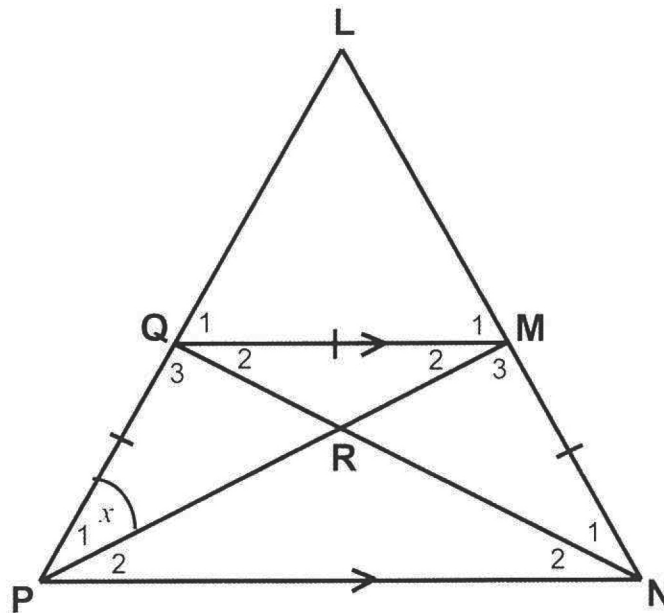
QUESTION 8

8.1 The sketch below shows rectangle $ABCD$ with points F and E drawn such that $AFCE$ is a rhombus.



If it is further given that $AB = 16\text{cm}$ and $BC = 12\text{cm}$, calculate the length of CF . (7)

8.2 In the diagram below $PQ = QM = MN$, $QM \parallel PN$ and $\hat{LPN} = \hat{LNP}$.



8.2.1 Show that MP bisects \hat{P} . (Hint: let $\hat{P}_1 = x$) (3)

8.2.2 Prove that $\triangle PRN \parallel \triangle QRM$. (3)

[13]

TOTAL: 75

GR 10

MATH + MLIT.



education
Department:
Education
PROVINCE OF KWAZULU-NATAL

**MATHEMATICS
COMMON TEST
MARCH 2019
MARKING GUIDELINE**

**NATIONAL
SENIOR CERTIFICATE**

GRADE 10

MARKS: 75

These marking guideline consists of 10 pages.

QUESTION 1

1.1.1	$6x^2 + 7x - 20$ $= (3x - 4)(2x + 5)$	<ul style="list-style-type: none"> ✓ $(2x + 5)$ ✓ $(3x - 4)$ 	(2)
1.1.2	$x^3 + x^2 - x - 1$ $= x^2(x + 1) - 1(x + 1)$ $= (x^2 - 1)(x + 1)$ $= (x - 1)(x + 1)(x + 1)$	<ul style="list-style-type: none"> ✓ common bracket ✓ factors ✓ diff. of two squares 	(3)
1.2.1	$(2x + 3)(5 - x)$ $= 10x - 2x^2 + 15 - 3x$ $= -2x^2 + 7x + 15$	<ul style="list-style-type: none"> ✓ $-2x^2$ ✓ $+7x$ ✓ $+15$ 	(3)
1.2.2	$(xy^3 - 3)(x^2y^6 + 3xy^3 + 9)$ $= (x^3y^9 - 27)$	<ul style="list-style-type: none"> ✓ x^3y^9 ✓ -27 	(2)
1.2.3	$3^{2x-1} \cdot 5^{x-3}$ $\frac{45^{x-2}}{3^{2x-1} \cdot 5^{x-3}}$ $= \frac{(3^2 \cdot 5)^{x-2}}{3^{2x-1} \cdot 5^{x-3}}$ $= \frac{3^{2x-4} \cdot 5^{x-2}}{3^{2x-1} \cdot 5^{x-3}}$ $= \frac{3^{2x-1-2x+4} \cdot 5^{x-3-x+2}}{3^3 \cdot 5^{-1}}$ $= \frac{27}{5}$	<ul style="list-style-type: none"> ✓ base as prime factors ($3^2 \cdot 5$) ✓ simplification ✓ adding and subtracting indices 	(4)
			[14]

Downloaded from Stanmorephysics.com

GRADE 10 MEMORANDUM

QUESTION 2

2.1	$(x-3)(x+2) = 0$ $\therefore x = 3$ or $x = -2$	✓✓ answers	(2)
2.2	$11 \times 3^{2n+1} = 297$ $3^{2n+1} = 27$ $3^{2n+1} = 3^3$ $\therefore 2n+1 = 3$ $2n = 2$ $n = 1$	✓ dividing through by 11 ✓ 3^3	(2)
2.3	$\frac{4x^2 - 3x - 1}{4x+1} + \frac{x^3 + 1}{x^2 - x + 1} = 2$ $\frac{(4x+1)(x-1)}{4x+1} + \frac{(x+1)(x^2 - x + 1)}{x^2 - x + 1} = 2$ $x - 1 + x + 1 = 2$ $2x = 2$ $x = 1$	✓✓ factors $(x+1)(x^2 - x + 1)$ ✓ factors $(4x+1)(x-1)$ ✓ simplification ✓ answer	(3)
2.4	$\pi x^2 h = V$ $x^2 = \frac{V}{\pi h}$ $x = \sqrt{\frac{V}{\pi h}}$	✓ dividing by πh ✓ answer	(2)
			112

GRADE 10 MEMORANDUM

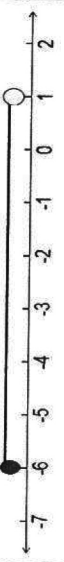
QUESTION 3

3.1	$\frac{9}{20}$	✓ answer	(1)
3.2.1	$1 - 3x = 0$ $x = \frac{1}{3}$	✓ denominator = 0 ✓ answer	(2)
3.2.2	$P = \frac{-20(7)}{1 - 3(7)} = \sqrt{7}$ $\sqrt{9} < \sqrt{7} < \sqrt{4}$ $3 < \sqrt{7} < 2$	✓ $\sqrt{7}$ ✓ answer	(2)
3.3	$x + 2$	✓ answer	(1)
			16

QUESTION 4

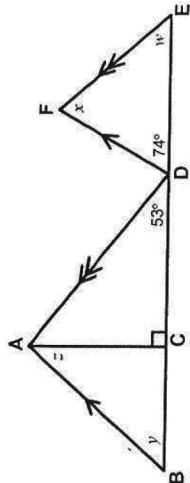
4.1	$4x = 10 - 3y$(Eq1) $y + 2x = 6$(Eq2) $(Eq2) \times 2 \rightarrow 2y + 4x = 12$(Eq3) $(Eq1) \rightarrow 3y + 4x = 10$(Eq4) $(Eq3) - (Eq4) \rightarrow -y = 2$ $y = -2$ Substitute $y = -2$ into (Eq 2) $\rightarrow -2 + 2x = 6$ $2x = 8$ $x = 4$	✓ multiply (Eq 2) by 2 ✓ subtracting (Eq 3) and (Eq 4) ✓ y-value ✓ substitution of y back into Eq ✓ x-value OR/OF ✓ multiply (Eq 2) by 3 ✓ subtracting (Eq 3) and (Eq 4) ✓ x-value ✓ substitution of x back into Eq ✓ y-value
	OR/OF $4x = 10 - 3y$(Eq1) $y + 2x = 6$(Eq2) $(Eq2) \times 3 \rightarrow 3y + 6x = 18$(Eq3) $(Eq1) \rightarrow 3y + 4x = 10$(Eq4) $(Eq3) - (Eq4) \rightarrow 2x = 8$ $x = 4$ Substitute $x = 4$ into (Eq 2) $\rightarrow y + 2(4) = 6$ $y = -2$	

GRADE 10 MEMORANDUM

	<p>OR/OF</p> <p>$4x = 10 - 3y \dots\dots (Eq1)$ $y + 2x = 6 \dots\dots (Eq2)$ $(Eq2) \rightarrow y = 6 - 2x \dots\dots (Eq3)$ Substitute $(Eq3)$ into $(Eq1) \rightarrow 4x = 10 - 3(6 - 2x)$ $4x = 10 - 18 + 6x$ $-2x = -8$ $x = 4$ Substitute $x = 4$ into $(Eq3) \rightarrow y = 6 - 2(4)$ $y = -2$</p>	<p>OR/OF</p> <p>✓ $(Eq3)$ ✓ Substitution of $(Eq3)$ into $(Eq1)$ ✓ x-value ✓ substitution of x back into $Eq2$ ✓ y-value</p>	(5)
4.2.1	<p>$-9 \leq 2x + 3 < 5$ $-12 \leq 2x < 2$ $-6 \leq x < 1$</p>	<p>✓ $2x$ ✓ -6 ✓ 1</p>	(3)
4.2.2		<p>✓ answer</p>	(1)
4.2.3	<p>$x \in [-6; 1)$</p>	<p>✓ answer</p>	(1)
4.3	<p>Let the first number = x \therefore second number = $2x - 4$ and third number = $4x + 2$</p> $\therefore \frac{x + (2x - 4) + (4x + 2)}{3} = 25$ <p>$x + 2x - 4 + 4x + 2 = 75$ $7x - 2 = 75$ $7x = 77$ $x = 11$</p> <p>The smallest number is therefore 7.</p>	<p>✓ equation for mean ✓ $2x - 4$ ✓ $4x + 2$ ✓ answer</p>	(4)
			14

GRADE 10 MEMORANDUM

QUESTION 5

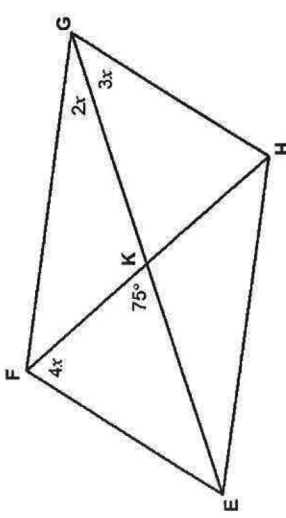
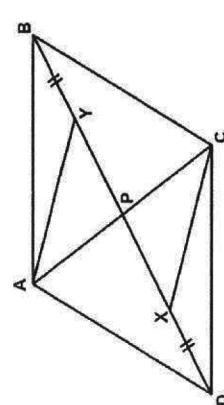
	<p>5.</p>	
<p>$w = 53^\circ$ $x = 53^\circ$ $y = 74^\circ$ $z = 16^\circ$</p>	<p>(corresponding \angles; $AD \parallel FE$) (angle sum Δ) (corresponding \angles; $AB \parallel FD$) (angle sum Δ)</p>	<p>✓ S/R ✓ S/R ✓ S/R ✓ S/R</p>

QUESTION 6

6.1.1	Kite	✓ answer (1)
6.1.2	Parallelogram OR Rectangle OR Square	✓ answer (any one) (1)
6.2	Rhombus OR Square	✓ answer (any one) (1)
6.3	Rectangle	✓ answer (1)
		4

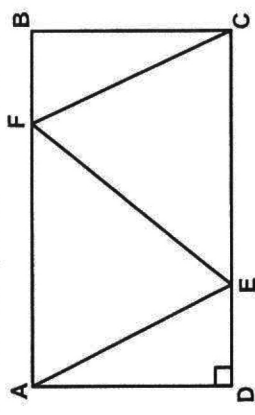
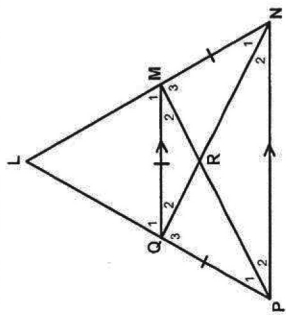
GRADE 10 MEMORANDUM

QUESTION 7

7.1		<p>alternate \angles; $FE \parallel GH$</p> <p>\checkmark S/R</p>	
7.1.1	<p>$\hat{F}EG = 3x$</p> <p>In $\triangle FEK$:</p> <p>$4x + 3x + 75^\circ = 180^\circ$ (angle sum Δ)</p> <p>$7x = 105^\circ$</p> <p>$x = 15^\circ$</p>	<p>\checkmark S/R</p> <p>\checkmark S/R</p> <p>\checkmark answer</p>	(3)
7.1.2	<p>$\hat{F}GH = 5x$</p> <p>$\hat{F}GH = 5(15^\circ) = 75^\circ$</p> <p>$\therefore \hat{G}HE = 105^\circ$ (co-interior \angles; $FE \parallel GH$)</p>	<p>$\checkmark \hat{F}GH = 75^\circ$</p> <p>$\checkmark$ answer</p>	(2)
7.2		<p>$BP = DP$ (diagonals of parm)</p> <p>But $BY = YD$ (given)</p> <p>$\therefore XP = YP$ (diagonals of parm)</p> <p>$AP = CP$ (diagonals of parm)</p> <p>$\therefore AYCX$ is a parm (diagonals of parm bisect each other)</p> <p>\checkmark S/R</p> <p>\checkmark S/R</p>	(3)
			18

GRADE 10 MEMORANDUM

QUESTION 8

8.1		<p>Let $BF = x$</p> <p>$AF = AB - BF$</p> <p>$\therefore AF = 16 - x$</p> <p>$\therefore CF = 16 - x$ (adjacent sides of rhombus)</p> <p>In $\triangle BCF$: $CF^2 = BC^2 + BF^2$ (Pythag)</p> <p>$(16 - x)^2 = 12^2 + x^2$</p> <p>$256 - 32x + x^2 = 144 + x^2$</p> <p>$-32x = -112$</p> <p>$x = \frac{7}{2}$</p> <p>$\therefore CF = 16 - \frac{7}{2}$</p> <p>$CF = 12,5 \text{ cm}$</p>	<p>\checkmark S</p> <p>\checkmark S</p> <p>\checkmark S/R</p> <p>\checkmark S/R</p> <p>$\checkmark 256 - 32x + x^2 = 144 + x^2$</p> <p>$\checkmark x = \frac{7}{2}$</p> <p>$\checkmark$ answer</p>	(7)
8.2		<p>Let $\hat{P}_1 = x$</p> <p>$\therefore \hat{M}_2 = x$ (angles opposite = sides)</p> <p>$\therefore \hat{P}_3 = x$ (alternate \angles; $QM \parallel PN$)</p> <p>$\therefore \hat{M}_2 = \hat{P}_3$</p> <p>$\therefore MP$ bisects \hat{P}</p>	<p>\checkmark S/R</p> <p>\checkmark S/R</p> <p>\checkmark S</p>	(3)

GRADE 10 MEMORANDUM

8.2.2	<p>In $\triangle PRN$ and $\triangle QRM$</p> <p>$\hat{P} = \hat{M}$ (alternate \angles; $QM \parallel PN$)</p> <p>$\hat{N} = \hat{Q}$ (alternate \angles; $QM \parallel PN$)</p> <p>$PRN = MRQ$ (vertically opposite \angles)</p> <p>$\therefore \triangle PRN \parallel \triangle QRM$ ($\angle\angle\angle$)</p>	<p>✓ S/R</p> <p>✓ S/R</p> <p>✓ S/R</p>
TOTAL: 75		(3)
		[13]

GRADE 10 MEMORANDUM

GEOMETRY • MEETKUNDE	
S	<p>A mark for a correct statement (A statement mark is independent of a reason)</p> <p>'n Punt vir 'n korrekte bewering (’n Punt vir 'n bewering is onafhanklik van die rede)</p>
R	<p>A mark for the correct reason (A reason mark may only be awarded if the statement is correct)</p> <p>'n Punt vir 'n korrekte rede (’n Punt word slegs vir die rede toegeken as die bewering korrek is)</p>
S/R	<p>Award a mark if statement AND reason are both correct</p> <p>Ken 'n punt toe as die bewering EN rede beide korrek is</p>